

### LEVEL 1 CHALLENGE GRADE 4 AND 5 ROUND TWO

NAME	MEMO	GRADE	
SCHOOL		MARK OUT OF 40	

### SECTION A

#### INSTRUCTIONS

- Circle the letter you have chosen as your answer in pen.
- Should you wish to change an answer, put a cross over the letter and then circle your new chosen letter.

1. A **B** C D E

6. A B **C** D E

2. A **B** C D E

7. A B C **D** E

3. A **B** C D E

8. **A** B C D E

4. A **B** C D E

9. A B C D **E**

5. **A** B C D E

10. A B **C** D E

## SECTION B

- Show all working and write your final answer clearly in the blocks where applicable.

11.

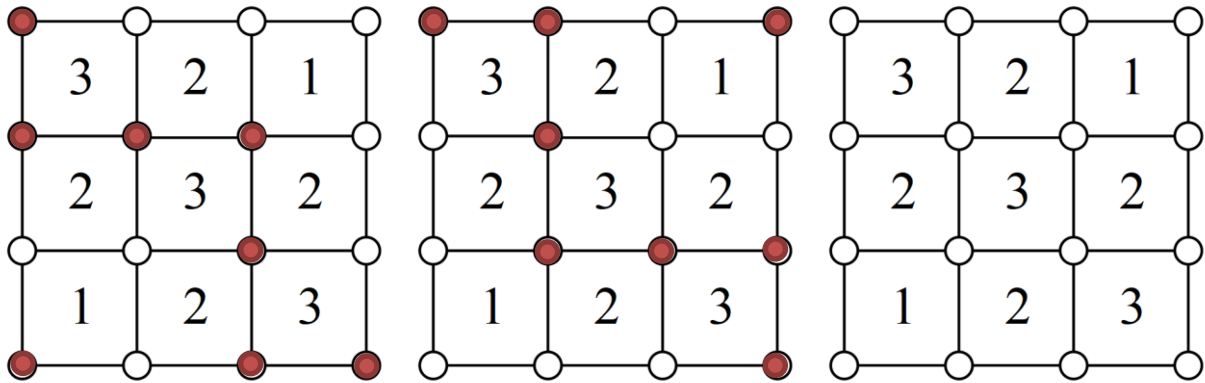
TWO-DIGIT NUMBER    \_\_\_\_\_

$$9 + 1 = 10$$

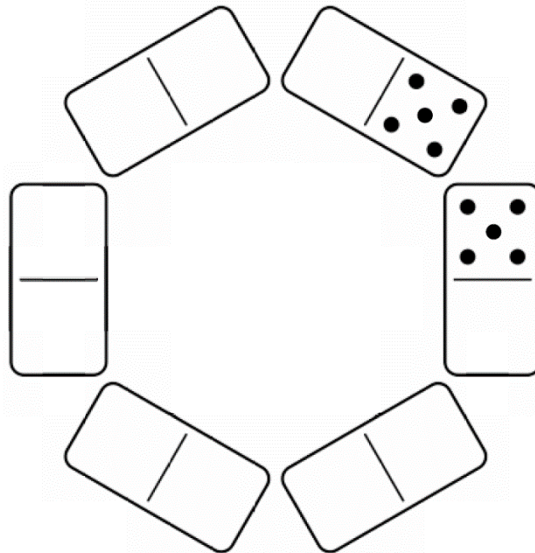
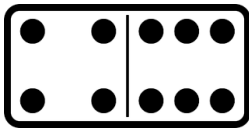
$$91 - 72 = 19$$

91

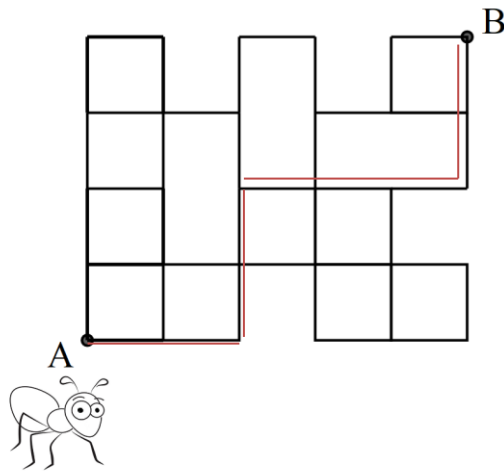
12. Three diagrams have been provided in case a mistake is made.



13.

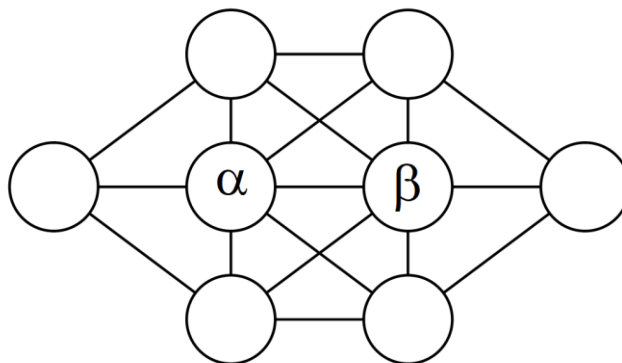
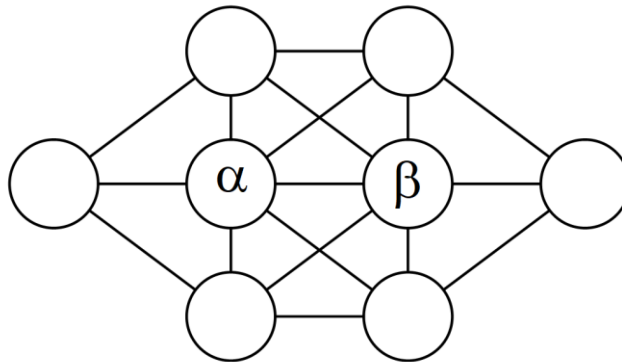
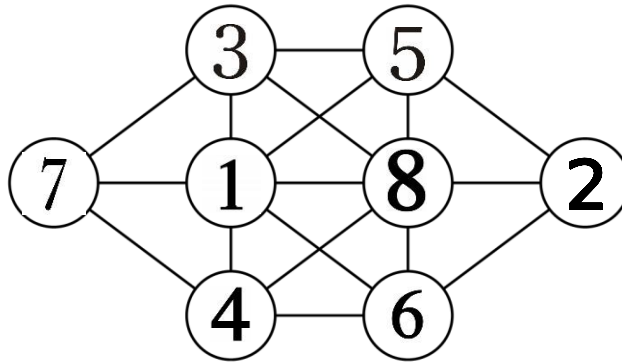


14.



99 sec

15. Three diagrams have been provided in case a mistake is made.



$1 + 8 = 9$